

ADDITION – ACTIVITY THREE

Remember, it's important to try your best and it isn't a requirement to complete every part of the sheet.

Learning Objective: To find and represent the addition facts of numbers within 20.

Can You Do It? Solve the Bar Models.



$$\square + \square = \square$$



$$\square + \square = \square$$



$$\square + \square = \square$$



$$\square + \square = \square$$




$$\square + \square = \square$$


ADDITION – ACTIVITY THREE

Learning Objective: To find and represent the addition facts of numbers within 20.


Challenge: Can you represent different number sentences on the Bar Model where the whole is 10?




$$\square + \square = \square$$




$$\square + \square = \square$$




$$\square + \square = \square$$




$$\square + \square = \square$$




$$\square + \square = \square$$



$$\square + \square = \square$$



$$\square + \square = \square$$



$$\square + \square = \square$$