











## ADDITION – ACTIVITY ONE

Remember, it's important to try your best and it isn't a requirement to complete every part of the sheet.

**Learning Objective:** To find and represent the addition facts of numbers within 20.

**Can You Do It?** Count each part. Add each part together. Find the whole.

 <span style="font-size: 2em; vertical-align: middle;">+</span> 	<span style="font-size: 2em; vertical-align: middle;">+</span> <span style="font-size: 2em; vertical-align: middle;">=</span>
 <span style="font-size: 2em; vertical-align: middle;">+</span> 	<span style="font-size: 2em; vertical-align: middle;">+</span> <span style="font-size: 2em; vertical-align: middle;">=</span>
 <span style="font-size: 2em; vertical-align: middle;">+</span> 	<span style="font-size: 2em; vertical-align: middle;">+</span> <span style="font-size: 2em; vertical-align: middle;">=</span>
 <span style="font-size: 2em; vertical-align: middle;">+</span> 	<span style="font-size: 2em; vertical-align: middle;">+</span> <span style="font-size: 2em; vertical-align: middle;">=</span>
 <span style="font-size: 2em; vertical-align: middle;">+</span> 	<span style="font-size: 2em; vertical-align: middle;">+</span> <span style="font-size: 2em; vertical-align: middle;">=</span>

## ADDITION – ACTIVITY ONE

**Learning Objective:** To find and represent the addition facts of numbers within 20.

**Challenge:** Can you represent your own number sentences with the whole as 10?

	$+$	$= 10$
	$+$	$= 10$
	$+$	$= 10$
	$+$	$= 10$
	$+$	$= 10$